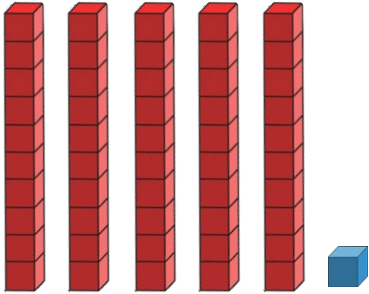


Place Value

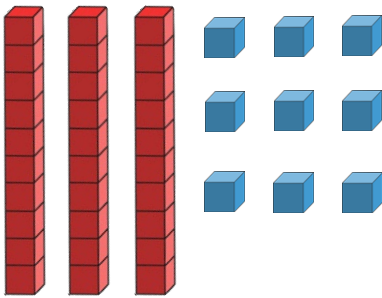
Name: _____ Date: _____

Write how many groups of tens and ones there are.



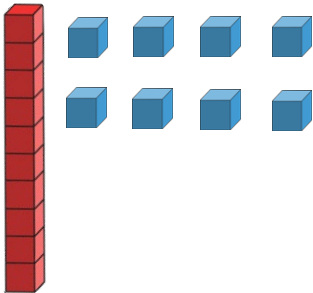
_____ tens _____ one

_____ + _____ = _____



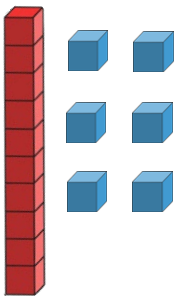
_____ tens _____ ones

_____ + _____ = _____



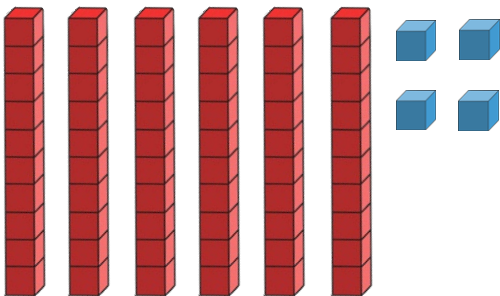
_____ ten _____ ones

_____ + _____ = _____



_____ ten _____ ones

_____ + _____ = _____



_____ tens _____ ones

_____ + _____ = _____